



NAME _____

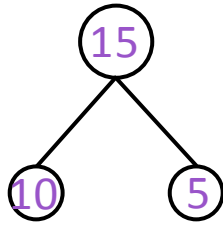

DATE _____

ADDITIONS

Using 5 groups show how to make ten and taking from ten to solve the two number sentences. Make a number bond and write additional number sentences that would have this number bond.

Examples:

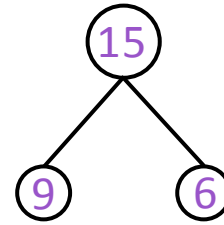
a) $6 + 9 = 15$



$$\underline{9 + 6 = 15}$$

$$\underline{15 = 6 + 9}$$

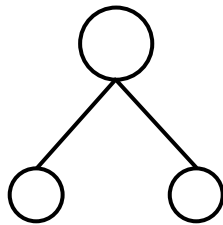
b) $15 - 9 = 6$



$$\underline{15 - 9 = 6}$$

$$\underline{15 - 6 = 9}$$

1) $3 + 9 = \underline{\quad}$



2) $12 - 9 = \underline{\quad}$

